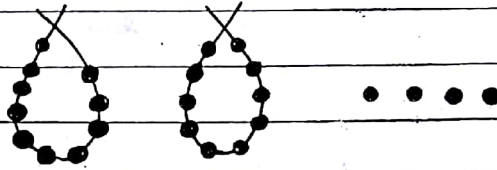


बृहन्मुंबई महानगरपालिका शिक्षण विभाग  
संकलित मूल्यमापन - ६  
इयत्ता-दुसरी विषय-गणित गुण-२०

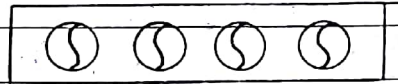
Subject : Mathematics

Q. 1 Count and select the correct number. ①




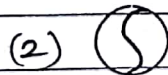

(1) 22 (2) 23 (3) 24 (4) 25

Q. 2 Count the objects and choose the correct option. ①



(1) One (2) Two (3) Three (4) Four

Q. 3 Select the light object. ①



Q. 4 Identify the unit place of the given number - 34 ①

(1) 1 (2) 2 (3) 3 (4) 4

Q. 5 Identify the shape. ①

(1) Circle

(2) Rectangle

(3) Square


(4) Triangle

Q.6 Count the circles in the given picture and <sup>choose</sup> the correct option. ①




- (1) 1      (2) 2      (3) 3      (4) 4

Q.7 Observe the pictures. Find the number of differences between them. ①




- (1) 4      (2) 3      (3) 2      (4) 1

Q.8 Complete the pattern. ①



- (1) ←      (2) ↑      (3) →      (4) ↓

Q.9 Fill in the correct month between given months. ①



- (1) April      (2) August  
(3) June      (4) March

Q.10 There are \_\_\_\_\_ days in a week. ①

- (1) 3      (2) 4      (3) 5      (4) 7



5 Count the parrots given in the picture. (2)

- (1) 1      (2) 3      (3) 5      (4) 7

Q.16 Subtract the following and choose the correct option. (2)

$$\begin{array}{r} 15 \\ - 9 \\ \hline \end{array}$$

- (1) 6      (2) 8      (3) 15      (4) 24

Q.11 Observe the pattern and choose the correct alternative in the box. (1)

2	4		8	10
---	---	--	---	----

- (1) 5      (2) 6      (3) 7      (4) 8


Q.12 Choose two digit biggest number (1)

- (1) 68    (2) 52    (3) 43    (4) 21

Q.13 Select the wrong pair of unit and tens from given numbers. (2)

- (1) 2 tens 1 unit = 21  
(2) 3 tens 5 unit = 35  
(3) 5 tens 6 unit = 56  
(4) 6 tens 8 unit = 86

For Q.14 and Q.15: Observe the pictures in the box and answer the questions given below.



Q.14 Count the mangoes and strawberry altogether given in the picture. (2)

- (1) 9      (2) 10      (3) 11      (4) 12



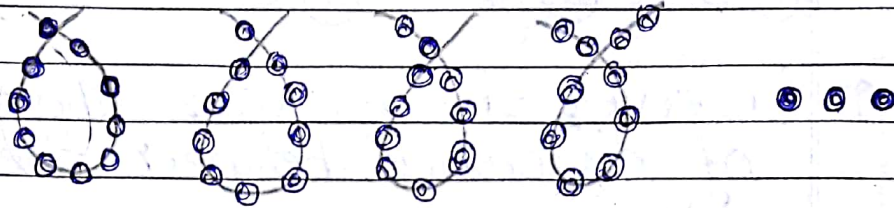
# Brihan Mumbai Municipal Corporation

Education - Department  
2018-19

Summative - Evaluation - 1  
3rd - Second Subject - Mathematics Marks 20

Q1 Count and select the correct number :-


(1)



(1) 54      (2) 43      (3) 34      (4) 63

Q2 Count the objects and choose the correct option.

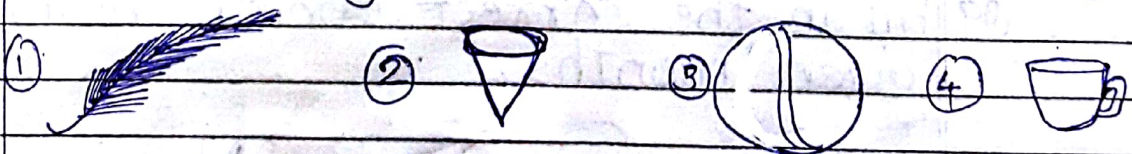
(1)



(1) Two      (2) Three      (3) Five      (4) One

Q3 Select the light object

(1)




Q4 Identify the unit place of the given number 89

(1)

(1) 5      (2) 6      (3) 9      (4) 8

Q5 Identify the shape

(1)



(1) square      (2) Rectangle      (3) circle      (4) Triangle




Q6 Count the triangles in the given picture.  $\Delta$ . Choose the correct option.



(1)

- (1) 5    (2) 4    (3) 6    (4) 0

Q7 Observe the pictures find the number of difference between them.




(1)

- (1) 2    (2) 3    (3) 5    (4) 1

Q8 Complete the pattern.

(1)



- (1)  $\Delta$     (2)  $\square$     (3)  $\circ$     (4)  $\text{—}$

Q9 Fill in the correct month between given months.

(1)

January  March

- (1) June    (2) May    (3) February    (4) July

Q10 There are \_\_\_\_\_ days in a week.

(1)

- (1) 7    (2) 3    (3) 5    (4) 7



Q11 Observe the pattern and choose the correct alternative in the box. (1)

3 | 6 |   | 12 | 15

- (1) 8      (2) 10      (3) 9      (4) 11


Q12 Choose two digit biggest number (1)

- (1) 25      (2) 99      (3) 52      (4) 11

Q13 Select the wrong pair of unit and tens from given numbers:- (2)

- (1) 3 tens      2 unit = 32  
(2) 4 tens      5 unit = 45  
(3) 2 tens      2 unit = 22  
(4) 4 tens      5 unit = 54

For Q.14 and Q.15 Observe the picture in the box and answer the question given below.



Q14 Count the Apple and stars altogether given in the picture. (2)

- (1) 9      (2) 12      (3) 14      (4) 15



Q15 Count the balls in the given picture (2)

- (1) 5      (2) 4      (3) 3      (4) 2

Q16 Subtract the following and choose the correct options:- (2)

$$\begin{array}{r} 24 \\ - 8 \\ \hline \end{array}$$

- (1) 10      (2) 15      (3) 16      (4) 19