

# SUMMATIVE EVALUATION. [I-TERM]

PAGE NO.:

Std: Fifth

Subject: Environmental Studies

DATE / /

Marks: (40)

Q.I

Choose the correct option:

Marks

1. What will you do if you see a handicapped person on the road? (2)

- (a) Avoid the person.
- (b) Help the person.
- (c) Laugh at the person.
- (d) Tell your friend to help that person.

2. 'Amul' brand is related to which occupation? (1)

- (a) Construction.
- (b) Dairy products.
- (c) School material stores.
- (d) Clothes.

3. What will you do if the water pipeline near your house is leaking and water is wasting? (2)

- (a) Sit quietly.
- (b) Play in the water.
- (c) Complain in the B.M.C.
- (d) Will do nothing.

Q.II

Write any 2 names of the following:

(6)

1. Animals having no vertebral columns.
2. Egg laying animals.
3. Irrigation method.

Q.III

Fill in the blanks with appropriate words:

(5)

1. \_\_\_\_\_ means gradual and continuous change.
2. Every day of the lunar month is called the \_\_\_\_\_.




3. \_\_\_\_\_ used Keertans to stress the important of keeping the village clean.

4. Various \_\_\_\_\_ are available to us in our school.

5. The envelope of the air around the earth is called \_\_\_\_\_.

Q-IV (A) Complete the food chain :

(2)



(B) Underline the landforms :

(2)

1. Himalayan mountains are to the east of India.

2. Nilesh went to Dharapuri island for the picnic.

(C) Draw the labelled diagram of watercycle and write a short note on it.

(5)

Q-V (A) A robbery took place at Raju's house. Where should he go and complain about it?

(1)

- (a) police station.
- (b) Municipal Corporation.
- (c) Co-operative Bank.
- (d) Post office.

(B) Reena and Meena participated in the essay writing competition. Reena got 1<sup>st</sup> prize and everyone appreciated her. Meena was quite. According to you what should Meena do?

(2)



- (a) She should stop talking to Reena.
- (b) She starts feeling inferior.
- (c) Never participates in any competition.
- (d) Shows sportsmanship by accepting her defeat and appreciate Reena.

(C) In the atmosphere \_\_\_\_\_ gas is present in the highest proportion. (1)

- (a) oxygen.
- (b) nitrogen.
- (c) hydrogen.
- (d) carbon-di-oxide.

(D) \_\_\_\_\_ is used to observe the unicellular living things. (1)

- (a) Binocular
- (b) Barometer.
- (c) Microscope.

(E) The nearest star to the earth. (1)

- (a) earth.
- (b) jupiter.
- (c) sun.
- (d) saturn.

Q.VI

(A) Write in short: (4)

1. Why people become homeless?
2. Write the characteristics of animals.

(B) What do birds use to build their nest? (2)



Q. VII

Say whether it is true or false:

1. Tobacco added substances are harmful to health.
2. Grasshopper eats bird.
3. Houses have slanting roofs in heavy rainfall areas.

Marks-

(3)

FORMATIVE EVALUATION (I-TERM)

Std: Fifth Subject: Environmental Studies. Marks: (10)

Q. I

Say the answers:

1. Capital of India.
2. Smallest state of India.
3. Satellite of earth.
4. Nearest planet to the sun.
5. Implements required for agriculture.


(5)

Q. II




For what purpose the following signs and symbols are used in the map?

(5)

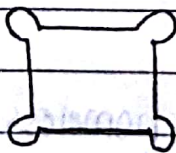
1.



2.



3.



4.



5.

